

# Geometry A – Chapter 1 Final Review Practice

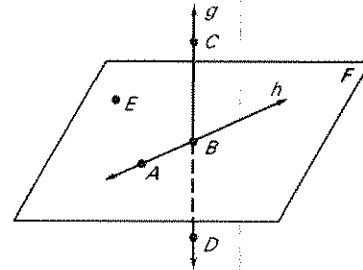
Name: \_\_\_\_\_ Date: \_\_\_\_\_ Hour: \_\_\_\_\_

## Section 1.1 Identify Points, Lines, and Planes

Use the diagram to answer the following questions.

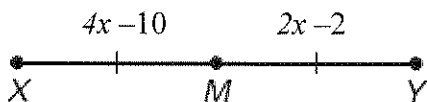
**TRUE or FALSE**

1. Points **A**, **B** and **C** are collinear. \_\_\_\_\_
2. Points **A** and **B** are collinear. \_\_\_\_\_
3. Points **C**, **B**, and **D** are collinear. \_\_\_\_\_
4. Points **A**, **B**, and **E** are coplanar. \_\_\_\_\_
5. Points **A**, **B**, and **C** are coplanar. \_\_\_\_\_
6. Another name for plane **F** is **ABE**. \_\_\_\_\_
7. The intersection of two planes is a line. \_\_\_\_\_
8. The intersection of two lines is a point. \_\_\_\_\_



## Section 1.2 Use Segments and Congruence

9.  $M$  is the midpoint of the segment. Find  $XY$ .



10. Let  $J$  be between  $H$  and  $K$  on  $\overline{HK}$ . Use the Segment Addition Postulate to solve for  $x$ .  
Then find  $HJ$  and  $JK$ . HINT: Draw a picture and label it.

$$\begin{aligned} HJ &= 2x - 3 \\ JK &= 4x - 10 \\ KH &= 17 \end{aligned}$$

$$x = \underline{\hspace{2cm}} \qquad HJ = \underline{\hspace{2cm}} \qquad JK = \underline{\hspace{2cm}}$$

11. The notation for the length of the segment between  $S$  and  $T$  is \_\_\_\_\_.

A.  $\angle ST$       B.  $\overline{ST}$       C.  $ST$       D.  $\overrightarrow{ST}$

12. If  $AM = 23$  and  $AB = 53$ , find the length of  $\overline{MB}$ .

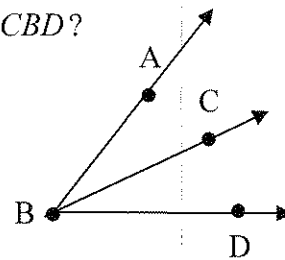


**Section 1.3 Use Midpoint and Distance Formulas**

13. Find the coordinates of the midpoint of the segment with the given endpoints.  
 $R(3, 4)$  and  $S(-9, -4)$
14. What is the distance between points  $C(-4, 5)$  and  $D(2, -1)$ .

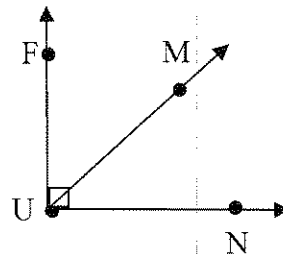
**Section 1.4 Measure and Classify Angles**

15. If  $\angle X \cong \angle Y$  and  $m\angle Y = 65^\circ$ , then what is  $m\angle X$ ?
16. The measure of  $\angle R$  is  $100^\circ$ . Classify  $\angle R$  as
- A. acute                      B. obtuse                      C. right                      D. straight
17. The measure of  $\angle T$  is  $89^\circ$ . Classify  $\angle T$  as
- A. acute                      B. obtuse                      C. right                      D. straight
18. If  $m\angle ABC = 26^\circ$  and  $m\angle ABD = 73^\circ$ , then what is the measure of  $\angle CBD$ ?



19. If  $\angle FUM$  is acute and  $\angle FUN$  is right, then  $\angle MUN$  is what kind of angle?

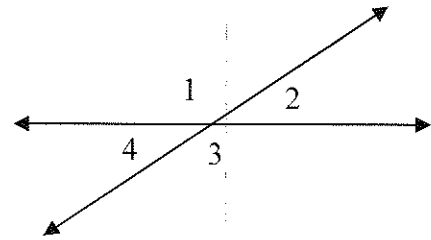
- A. acute                      B. obtuse
- C. right                      D. straight



### Section 1.5 Describe Angle Pair Relationships

For questions 20 – 23 refer to the figure at the right.

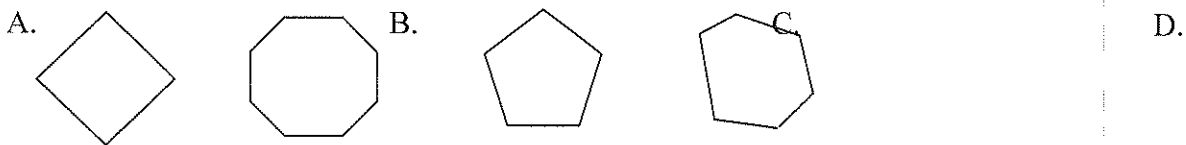
20. What type of angle pair is  $\angle 1$  and  $\angle 2$  ?
21. What type of angle pair is  $\angle 1$  and  $\angle 3$  ?
22. What type of angle pair is  $\angle 2$  and  $\angle 4$  ?
23. If  $m\angle 1 = 5x + 110$  and  $m\angle 2 = 10x + 40$ , then solve for  $x$ .



24. If  $\angle A$  and  $\angle B$  are complementary and  $m\angle A = 20^\circ$ , then  $m\angle B = \underline{\hspace{2cm}}$ .
25. If  $\angle C$  and  $\angle D$  are supplementary and  $m\angle C = 50^\circ$ , then  $m\angle D = \underline{\hspace{2cm}}$ .
26. If  $\angle E$  and  $\angle F$  form a linear pair and  $m\angle E = 60^\circ$ , then  $m\angle F = \underline{\hspace{2cm}}$ .

### Section 1.6 Classify Polygons

27. Classify the polygon.



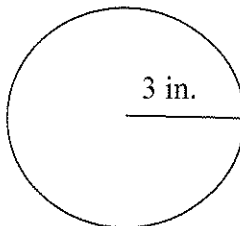
Match the vocabulary with the correct definition. Write the correct letter in the blank.

- |          |               |                     |
|----------|---------------|---------------------|
| 28. ____ | hexagon       | A. 3 sided polygon. |
| 29. ____ | quadrilateral | B. 4 sided polygon. |
| 30. ____ | octagon       | C. 5 sided polygon. |
| 31. ____ | heptagon      | D. 6 sided polygon. |
| 32. ____ | triangle      | E. 7 sided polygon. |
| 33. ____ | pentagon      | F. 8 sided polygon. |

**Section 1.7 Find Perimeter, Circumference, and Area**

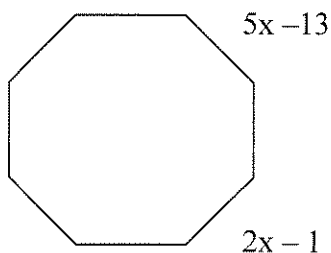
34. Your parents ask you to mow the lawn. It is a square plot that is 12 ft on each side and it has a circle cement fountain in the center that has a radius of 4 ft. What is the area of the lawn that you will mow?

35. Find the circumference and area of the circle.



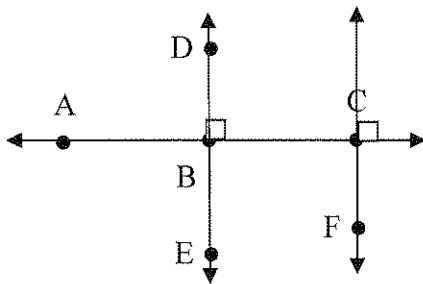
36. You are cutting out a triangular shape. The triangle is 7 inches in height and has a base of 6 inches. What is the area of the triangular shape?

37. Find the perimeter of the regular octagon.



## Section 2.4: Use Postulates and Diagrams

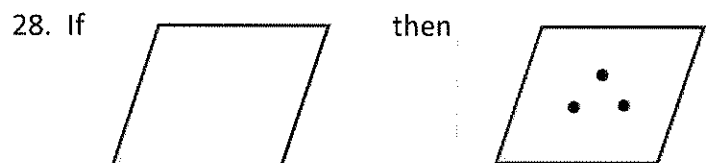
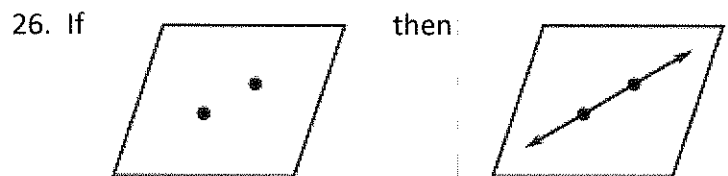
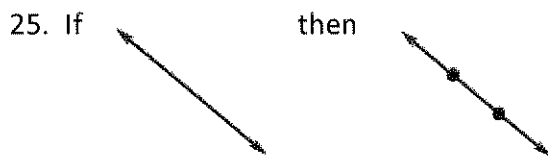
Use this diagram to answer the next questions as **True** or **False**.



10. Points A, B, D, and C are coplanar.
11.  $\angle EBA$  is a right angle.
12. Points E, B, and D are collinear.
13.  $\overleftrightarrow{FC} \perp \overleftrightarrow{AB}$
14.  $\angle ABD$  and  $\angle EBC$  are vertical angles.
15.  $\overleftrightarrow{AB}$  contains C.
16.  $\overleftrightarrow{FC}$  and  $\overleftrightarrow{DE}$  intersect.
17.  $\angle ABD$  and  $\angle CBD$  are congruent angles.
18.  $m\angle ABD + m\angle CBD = 180^\circ$ .
19.  $\angle ABD$  and  $\angle CBD$  are adjacent angles.
20.  $\angle ABD$  and  $\angle CBD$  are supplementary angles.
21.  $\angle ABD$  and  $\angle CBD$  are a linear pair.
22.  $\angle ABD \cong \angle BCF$ .
23.  $m\angle ABE = 90^\circ$ .
24. Perpendicular lines always form right angles.

Match the postulate illustrated by the diagram.

- A. Through any two points there exists there exists exactly one line.
- B. Through any three noncollinear points there exists exactly one plane.
- C. If two lines intersect, then their interaction is exactly one point.
- D. If two points lie in a plane, then the line containing them lies in the plane.
- E. If two planes intersect, then their intersection is a line.
- F. A line contains at least two points.
- G. A plane contains at least three noncollinear points.



**Section 2.5: Reason Using Properties from Algebra & Section 2.6: Using congruence Theorems**

Name the property that justifies the conclusion or statement.

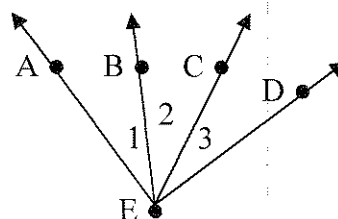
29. Given:  $8x - 34 = 6$   
Conclusion:  $8x = 40$
30. Given:  $-2x = 14$   
Conclusion:  $x = -7$
31. Given:  $x - 12 = 42$   
Conclusion:  $x = 54$
32. Given:  $4(m + 1)$   
Conclusion:  $4m + 4$
33. If  $\angle 1 \cong \angle 2$  and  $\angle 2 \cong \angle 4$ , then  $\angle 1 \cong \angle 4$ .
34.  $\overline{XY} \cong \overline{XY}$
35. If  $\angle CDE \cong \angle RST$ , then  $\angle RST \cong \angle CDE$ .
36. If  $RZ = 4$  and  $RZ + ST = 9$ , then  $4 + ST = 9$
37.  $\angle 1 \sim \angle 1$
38. If  $AB = CD$  and  $CD = EF$ , then  $AB = EF$ .

**Section 2.6: Prove Statements about Segments and Angles**

Match a reason for each step of the proof.

39. **GIVEN:**  $m\angle 1 = m\angle 3$   
**PROVE:**  $m\angle BED = m\angle AEC$

- A. Addition Property of Equality  
B. Angle Addition Postulate  
C. Given  
D. Substitution Proper of Equality



Statements	Reasons
1. $m\angle 3 = m\angle 1$	1.
2. $m\angle 3 + m\angle 2 = m\angle 1 + m\angle 2$	2.
3. $m\angle 3 + m\angle 2 = m\angle BED$	3.
4. $m\angle 1 + m\angle 2 = m\angle AEC$	4.
5. $m\angle BED = m\angle AEC$	5.

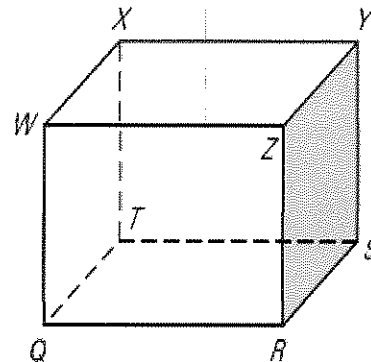
**Section 2.7: Prove Angle Pair Relationships**

40. True or False Vertical angles are always congruent.  
41. True or False Right angles are always congruent.  
42. True or False Linear pair angles are always adjacent.  
43. True or False Supplementary angles are always adjacent.  
44. True or False Complementary angles are always adjacent.  
45. True or False All birds can fly.

## Geometry A – Chapter 3 Final Review Practice

### Section 3.1 Identify Pairs of Lines and Angles

Use the cube to the right to answer the following questions.  
(parallel, perpendicular, or skew).

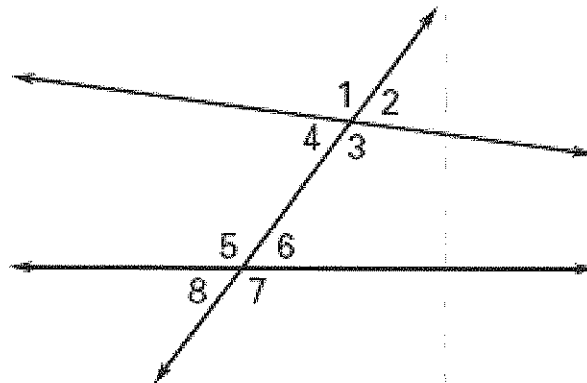


1.  $\overrightarrow{WZ}$  and  $\overrightarrow{WQ}$  are what type of lines?
2.  $\overrightarrow{WZ}$  and  $\overrightarrow{RS}$  are what type of lines?
3.  $\overrightarrow{WZ}$  and  $\overrightarrow{QR}$  are what type of lines?

Use the diagram to complete the next six statements with:

- A. Corresponding Angles      B. Alternate Interior Angles  
C. Alternate Exterior Angles    D. Consecutive Interior Angles

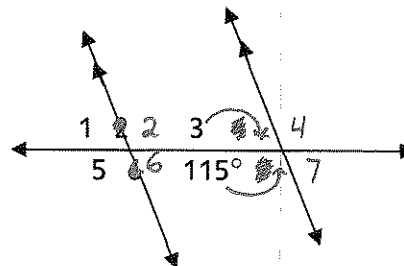
4.  $\angle 1$  and  $\angle 7$
5.  $\angle 4$  and  $\angle 6$
6.  $\angle 3$  and  $\angle 6$
7.  $\angle 2$  and  $\angle 6$
8.  $\angle 1$  and  $\angle 5$
9.  $\angle 2$  and  $\angle 8$



### Section 3.2 Use Parallel Lines and Transversals

Use the figure to the right to find the measure of each angle.

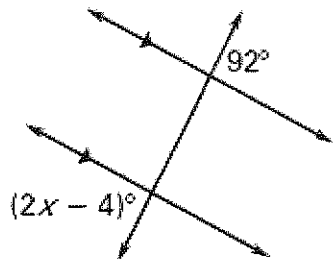
- |                   |                   |
|-------------------|-------------------|
| 10. $m\angle 1 =$ | 11. $m\angle 5 =$ |
| 12. $m\angle 2 =$ | 13. $m\angle 6 =$ |
| 14. $m\angle 3 =$ | 15. $m\angle 7 =$ |



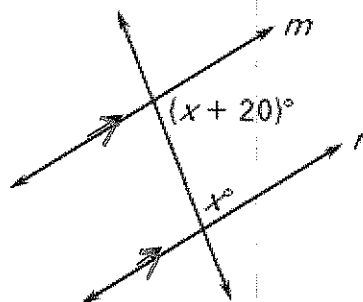
### Section 3.2 Use Parallel Lines and Transversals (continued)

Find the value of  $x$ .

16.



17.



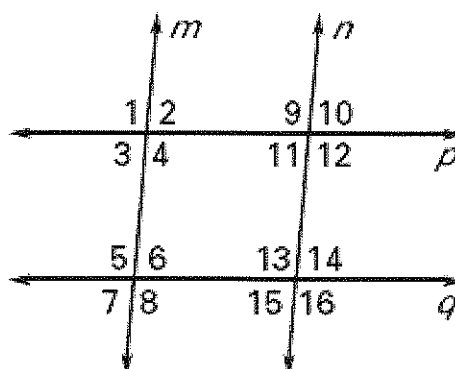
Use the diagram below and the given information to determine if  $m \parallel n$ ,  $p \parallel q$ , or *neither*.

18.  $\angle 2 \cong \angle 11$

19.  $\angle 1 \cong \angle 8$

20.  $\angle 10 \cong \angle 14$

21.  $\angle 2 \cong \angle 10$

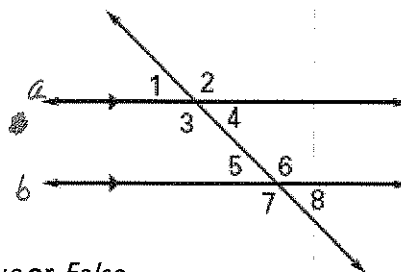


### Section 3.3 Prove Lines are Parallel

Use the given angle measures to decide whether lines  $a$  and  $b$  are parallel for the next two questions.

22.  $m\angle 3 = 86^\circ$ ,  $m\angle 6 = 94^\circ$

23.  $m\angle 1 = 63^\circ$ ,  $m\angle 6 = 117^\circ$



Use the diagram above to answer the following questions as *True* or *False*.

(assume  $a \parallel b$ )

24.  $\angle 4$  and  $\angle 6$  are supplementary angles?    25.  $\angle 2$  and  $\angle 7$  are congruent angles?

26.  $\angle 3$  and  $\angle 6$  are not congruent angles?    27.  $\angle 3$  and  $\angle 5$  are congruent angles?



**Section 3.4 Find and Use Slope of Lines**

28. Find the slope of the line that passes through the points (2, 5) and (7, 3). Then state the slope of the line parallel and perpendicular to the calculated slope.

29. Find the slope of the line that passes through the points (-3, 1) and (0, 3). Then state the slope of the line parallel and perpendicular to the calculated slope.

**Section 3.5 Write and Graph Equations of Lines**

30. Are lines  $y = 2x + 5$  and  $y = -\frac{1}{2}x - 3$  *parallel*, *perpendicular*, or *neither*?

31. What would the slope of a line be that was *perpendicular* to  $y = -\frac{1}{5}x + 2$ ?

32. What would the slope of a line be that was *parallel* to  $4x + 2y = 8$ ?

33. Write an equation in slope-intercept form that passes through the point (0, 7) and has a slope of  $\frac{1}{2}$ .

34. Write an equation in slope-intercept form that passes through the point (1, 5) and has a slope of 2.

35. Write an equation in slope-intercept form that is *parallel* to  $y = \frac{3}{4}x - 2$  and passes through point (0, 0)

•

36. Write an equation in slope-intercept form that is *perpendicular* to  $y = \frac{1}{2}x + 4$  and passes through point (2, 1).

**Section 3.6 Prove Theorems about Perpendicular Lines**

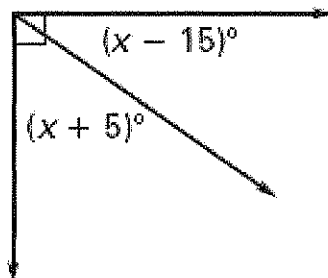
Name \_\_\_\_\_ Date: \_\_\_\_\_ Hour \_\_\_\_\_

37. True or False. If two lines are perpendicular to the same transversal, then they are parallel.

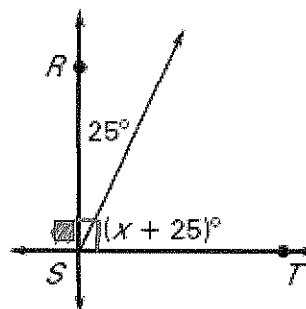
38. True or False. If two lines are perpendicular, then they intersect to form two right angles.

Find the value of  $x$ .

39.



40.



## Geometry A – Chapter 4 Final Review Practice

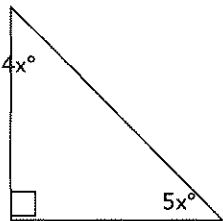
### Section 4.1 Apply Triangle Sum Properties

For problems # 1 – 4 , classify the triangle by its side lengths or angles.

- |  |   |
|--|---|
| 1. no congruent sides                                    | 2. Angles measures: $25^\circ$ , $130^\circ$ , $25^\circ$ |
| 3. Angles measures: $60^\circ$ , $60^\circ$ , $60^\circ$ | 4. Side lengths: 10cm, 10cm, 10cm                         |

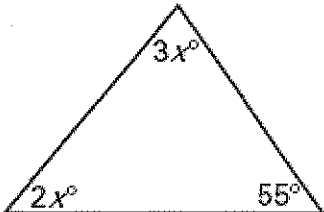
Find the value of  $x$ .

5.



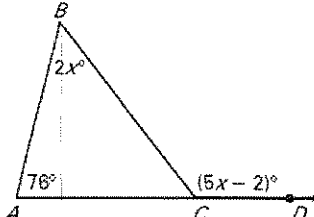
A right triangle with a right angle symbol at the bottom-left vertex. The top-left angle is labeled  $4x^\circ$  and the bottom-right angle is labeled  $5x^\circ$ .

6.



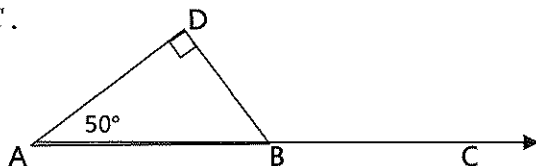
A triangle with interior angles labeled  $2x^\circ$  at the bottom-left,  $3x^\circ$  at the top, and  $55^\circ$  at the bottom-right.

7.

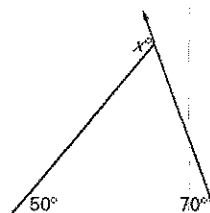


A triangle with interior angles labeled  $2x^\circ$  at the top,  $78^\circ$  at the bottom-left, and  $(5x - 2)^\circ$  at the bottom-right. The bottom-right angle is an exterior angle to a line segment extending from the bottom-left vertex.

8. Find  $m\angle DBC$ .



9. Find the value of  $x$ .



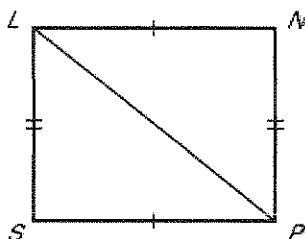
### Section 4.2 Apply Congruence and Triangles

Given,  $\triangle ABC \cong \triangle DEF$ . Complete the statement.

- |                                 |                             |                                 |
|---------------------------------|-----------------------------|---------------------------------|
| 10. $\overline{EF} \cong$ _____ | 11. $\angle A \cong$ _____  | 12. $\angle E \cong$ _____      |
| 13. $m\angle C =$ _____         | 14. $\overline{AC} =$ _____ | 15. $\triangle CBA \cong$ _____ |

Write the correct congruence statement for these triangles.

16.  $\triangle \underline{\hspace{1cm}} \cong \triangle \underline{\hspace{1cm}}$



Name \_\_\_\_\_ Date: \_\_\_\_\_ Hour \_\_\_\_\_

**Sections 4.3 to 4.5 Prove Triangle Congruence by SSS, SAS, HL, ASA, AAS & Use Congruent Triangles (CPCTC)**

Using the diagrams, choose the appropriate postulate or theorem that proves triangle congruence:

- A. SAS      B. SSS      C. ASA      D. AAS      E. HL

17.

18.

19.

20.

21.

22.

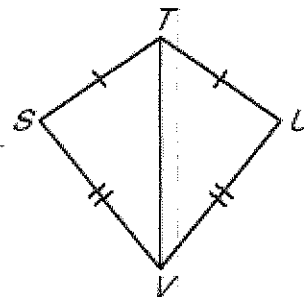
23.

24.


25.

26. Proof      Given:  $\overline{ST} \cong \overline{UT}, \overline{SV} \cong \overline{UV}$   
 Prove:  $\angle TSV \cong \angle TUV$

Statements	Reasons
1. $\overline{ST} \cong \overline{UT}, \overline{SV} \cong \overline{UV}$	1.
2. $\overline{TV} \cong \overline{TV}$	2.
3. $\triangle TSV \cong \triangle TUV$	3.
4. $\angle TSV \cong \angle TUV$	4.



27. Proof      Given:  $\overline{WZ} \parallel \overline{XY}, \overline{WZ} \cong \overline{XY}$   
 Prove:  $\triangle XWZ \cong \triangle ZYX$



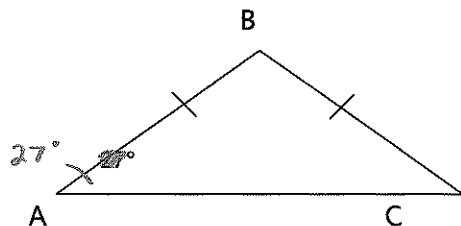
Name \_\_\_\_\_ Date: \_\_\_\_\_ Hour \_\_\_\_\_

Prove:  ~~$\triangle XWZ \cong \triangle ZYX$~~

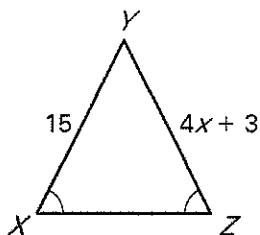
Statements	Reasons
1. $\overline{WZ} \parallel \overline{XY}, \overline{WZ} \cong \overline{XY}$	1.
2. $\overline{XZ} \cong \overline{XZ}$	2.
3. $\angle WZY \cong \angle YXZ$	3.
4. $\triangle XWZ \cong \triangle ZYX$	4.

#### Section 4.7 Use Isosceles and Equilateral Triangles

28. Find  $m\angle B$ .



29. Find the value of  $x$ .



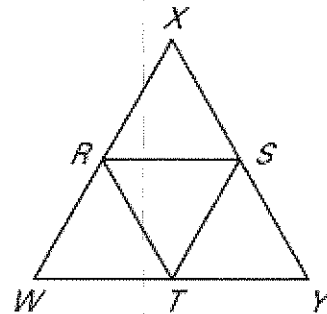
30. In  $\triangle SAT$ , if  $\overline{SA} \cong \overline{AT}$  and  $m\angle S = 44^\circ$ , then find the  $m\angle T$ .

## Geometry A – Chapter 5 Final Review Practice

### Section 5.1 Midsegment Theorem and Coordinate Proof

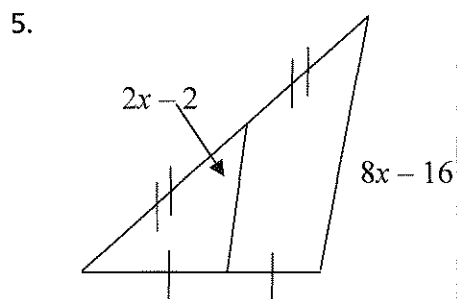
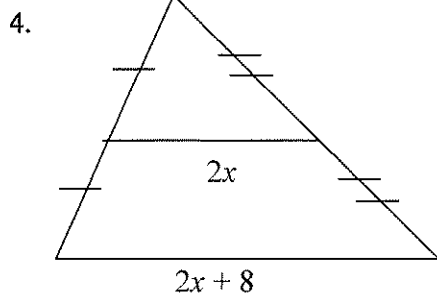
Use  $\triangle WXY$ , where  $R$ ,  $S$ , and  $T$  are midpoints of the sides.

1. If  $RS = 20$ , then  $WY =$  \_\_\_\_\_
2.  $\overline{RT} \cong$  \_\_\_\_\_ and \_\_\_\_\_
3. If the perimeter of  $\triangle RST$  is 60, then the perimeter of  $\triangle WXY$  is \_\_\_\_\_.



### Section 5.2 Use Perpendicular Bisectors

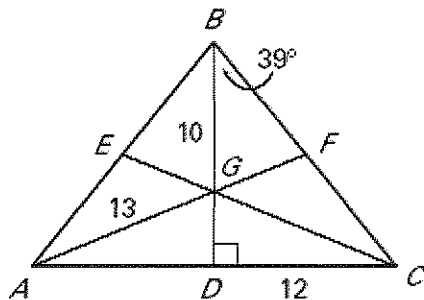
Find the value of  $x$ .



6. The point of concurrency for perpendicular bisectors of a right triangle is \_\_\_\_\_ the triangle.
- A. *inside*                      B. *on*                      C. *outside*

### Section 5.3 Use Angle Bisectors of Triangles & Section 5.4 Use Medians and Altitudes

Use the figure for the next three questions. In  $\triangle ABC$ ,  $\overline{BD}$  is an angle bisector,  $m\angle DBC = 39^\circ$ , and  $BF = FC$ .

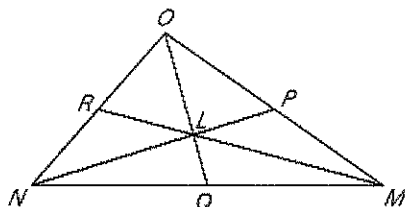


7. Find  $m\angle BAC$ .
8. Identify a median of  $\triangle ABC$ .
9. Identify an altitude of  $\triangle ABC$ .

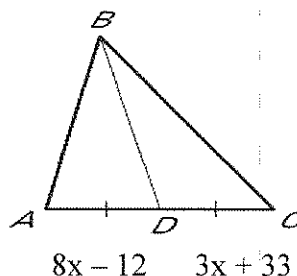
**Section 5.3 Use Angle Bisectors of Triangles & Section 5.4 Use Medians and Altitudes**

10. **Balancing.** You can balance a triangle-shaped object by finding the centroid of the triangle. The length of one median is 24 centimeters. How far from the vertex of the angle that the median was drawn is the centroid?

11. In the diagram,  $L$  is the centroid of  $\triangle MNO$  and  $LQ = 4$ . Find  $OQ$ .



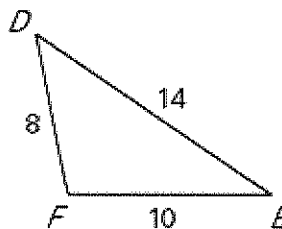
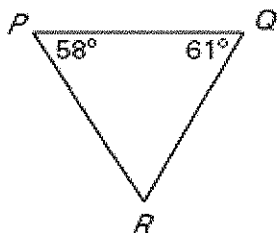
12.  $\overline{BD}$  is a median of  $\triangle ABC$ . Find  $x$



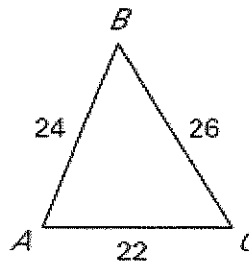
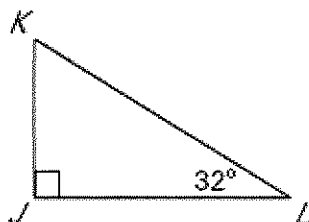
**Section 5.5 Use Inequalities in a Triangle**

Use the diagram below to list the following:

13. Sides in order from least to greatest.      14. Angles in order from least to greatest.



15. Sides in order from least to greatest.      16. Angles in order from least to greatest.



Determine whether it is possible to draw a triangle with sides of the given length.

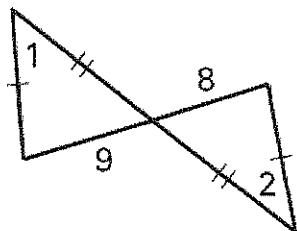
17. 1, 3, 6      18. 12, 17, 33      19. 5, 2, 6      20. 3, 4, 5

Name \_\_\_\_\_ Date: \_\_\_\_\_ Hour \_\_\_\_\_

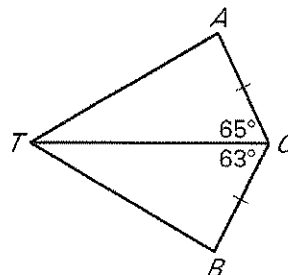
**Section 5.6 Inequalities in Two Triangles and Indirect Proofs**

Complete the statements with  $<$ ,  $>$ , or  $=$ .

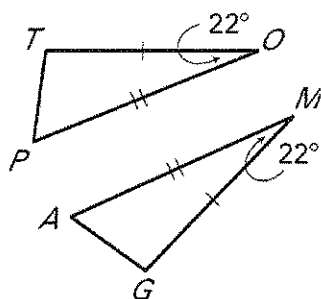
21.  $m\angle 1$  \_\_\_\_\_  $m\angle 2$



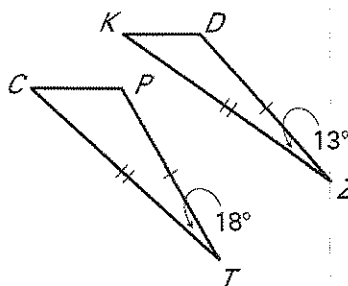
22.  $AT$  \_\_\_\_\_  $BT$



23.  $TP$  \_\_\_\_\_  $AG$



24.  $KD$  \_\_\_\_\_  $CP$





## Geometry A – Chapter 6 Final REVIEW Practice: Similarity

### 6.1 Ratios, Proportions & the Geometric Mean

1. Simplify the ratio.

$$\frac{10\text{in.}}{3\text{ft.}}$$

2. Solve the proportion.

a.  $\frac{10}{y-5} = \frac{6}{y}$

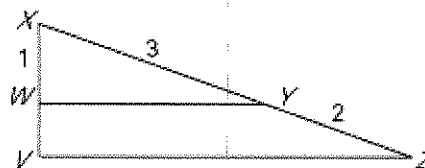
b.  $\frac{x-3}{6} = \frac{4x-2}{5}$

3. A survey found that 2 out of 7 students take a gym class per semester. If a high school has 4200 students, what is the estimate of the number of students that are taking a gym class?
4. It took you 20 minutes to burn 123 calories while exercising. At that rate, how many calories can you burn in 35 minutes?

### 6.2 Use Proportions to Solve Geometry Problems

5. If the exchange rate of the Euro to the American dollar is 0.81 to 1 and an Italian leather jacket costs 714 Euros, then what would its price be in American dollars?
6. On a map, two neighboring towns are 2.4 inches apart. The map has a scale of 1 in.:15 miles. What is the actual distance between the two towns?

7. Given  $\frac{XW}{WV} = \frac{XY}{YZ}$ , find WV.

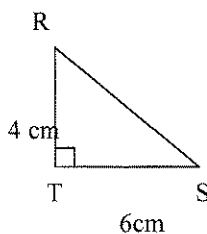
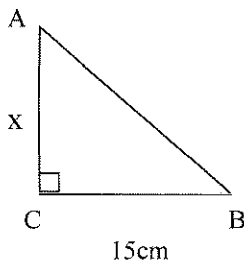


### 6.3 Use Similar Polygons

8. Give the definition of two SIMILAR polygons.
9.  $\triangle ABC$  and  $\triangle DEF$  are similar with  $\angle A \cong \angle D$ ,  $\angle B \cong \angle E$ , and  $\angle C \cong \angle F$ . If AB, BC, and AC are 2 inches, 5 inches, and 9 inches, respectively, and DE is 6 inches, find DF.

### 6.4 Prove Triangles Similar by AA ~

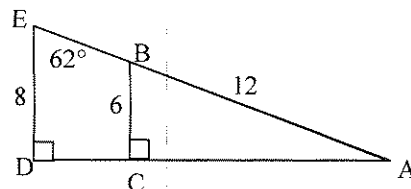
10. Find the value of  $x$  if  $m\angle A = m\angle R$ .



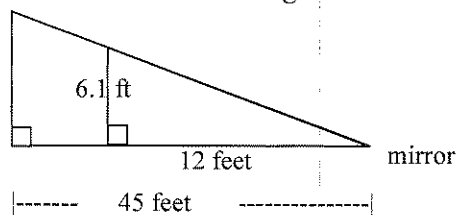
$x =$  \_\_\_\_\_

scale factor = \_\_\_\_\_

11. Find  $m\angle ABC$  and AE.

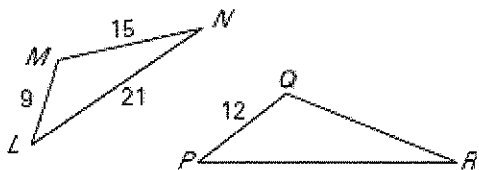


12. Jeremy wants to measure the height of the streetlight outside his house. He places a mirror on the ground 45 feet from the streetlight, then walks backward until he is able to see the top of the streetlight in the mirror. His eyes are 6.1 feet above the ground, and he is 12 feet from the mirror.

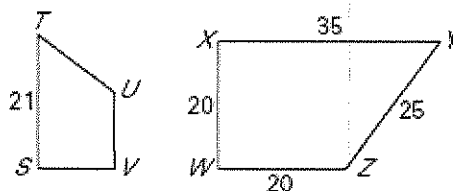


### 6.5 Prove Triangles Similar by SSS~ and SAS~

13.  $\triangle LMN \sim \triangle PQR$  Find QR.

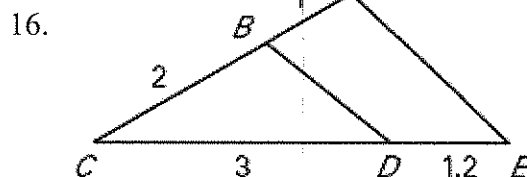
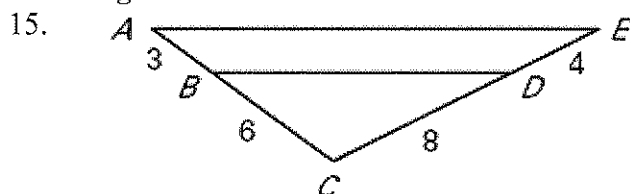


14.  $STUV \sim XYZW$  Find SV.

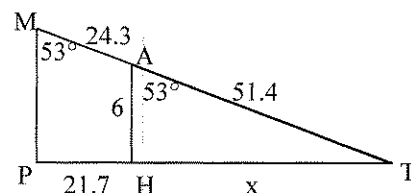


### 6.6 Use Proportionality Theorems

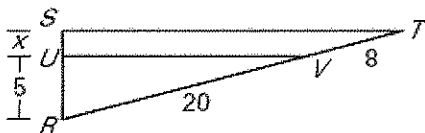
Use the given information to determine if  $\overline{AE} \parallel \overline{BD}$



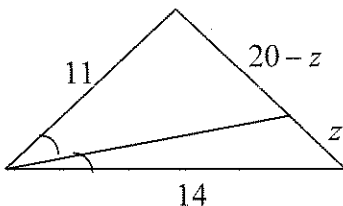
17. Find the value of x if possible.



18. Given that  $\overline{ST} \parallel \overline{UV}$ . Find x.



19. What is the value of z in the figure?



20. Find AB.

